

Skip Counting the Squares

1, 4, 9,

1, 4, 9,

16, 25, 36,

_____, 25, 36,

49, 64, 81,

49, _____, 81,

100, 121,

100, 121,

144, 169,

_____, 169,



196, 225



196, 225

1, _____, 9,

1, _____, 9,

_____, 25, 36,

_____, 25, _____,

49, _____, 81,

49, _____, 81,

_____, 121,

_____, 121,

_____, 169,

_____, 169,



196, 225




_____, _____



Squares Skip Counting Maze

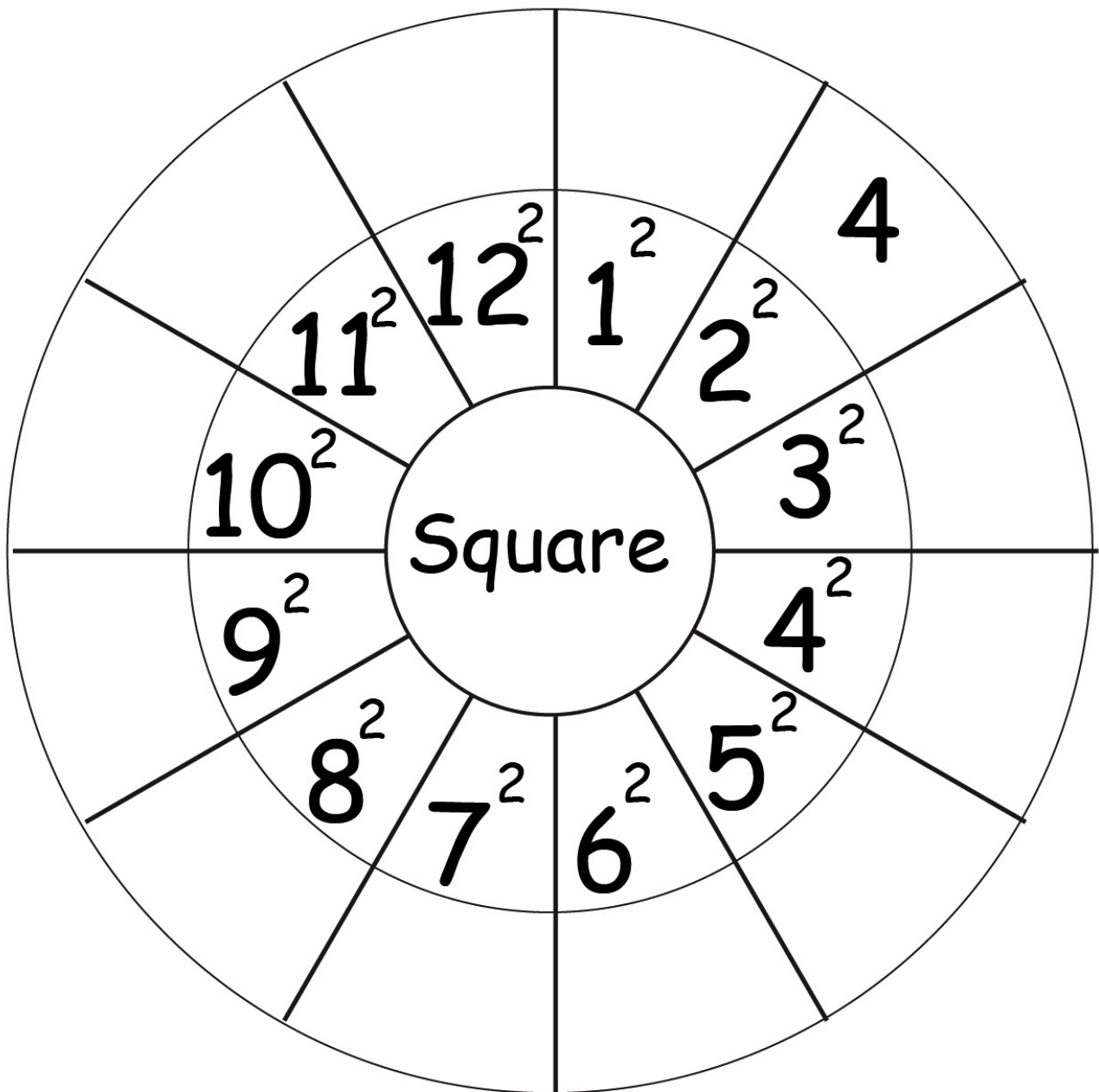
Start



	1	4	9	8	11	13	15	17	19
3	7	5	16	17	18	19	20	21	22
9	11	13	25	23	27	29	24	23	28
21	27	30	36	34	32	38	41	43	47
39	44	46	49	64	81	83	87	89	92
86	89	91	95	98	100	121	123	125	128
127	129	132	135	138	141	144	169	221	223
178	181	183	186	189	192	194	196	225	

Finish

Squares



Skip Counting the Cubes

1, 8,

1, 8,

27, 64,

27, _____,

125, 216,

125, 216,

343, 512,

_____, 512,

729,

729,

1

1000

2

1, _____,

1, _____,

27, _____,

_____, _____,

125, _____,

125, _____,

_____, 512,

_____, 512,

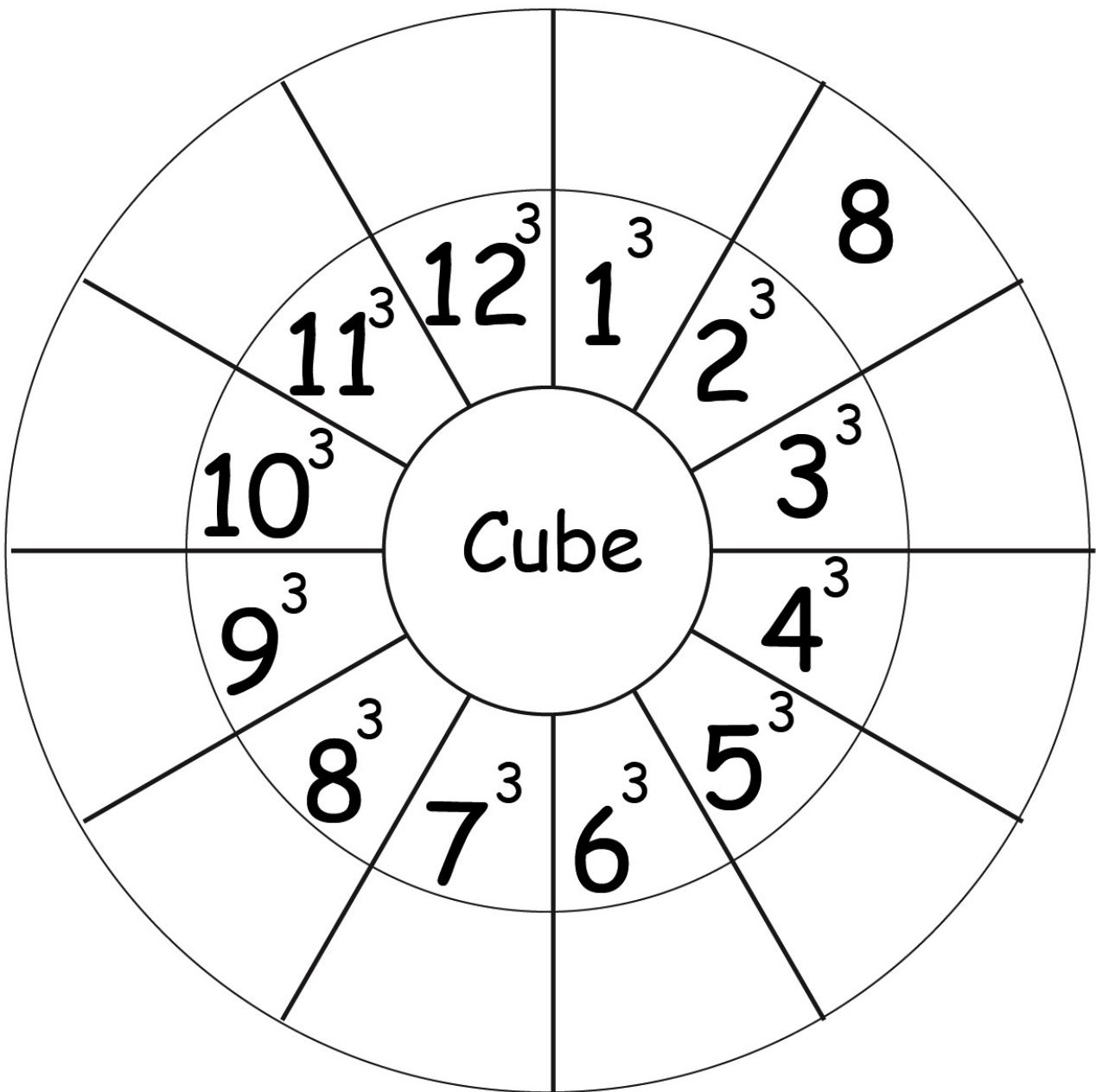
729,

729,

3

4

Cubes



Name: _____

Math Unit 12

Match each item on the left with the correct item on the right.

- | | | |
|--------------|---|------------------|
| 1. 1 foot | • | • 1.6 kilometers |
| 2. 3 feet | • | • 1 yard |
| 3. 5280 feet | • | • 12 inches |
| 4. 1 mile | • | • 1 mile |

Name: _____

Math Unit 13

Match each item on the left with the correct item on the right.

- | | | |
|----------------|---|--------------|
| 1. 1 pound | • | • 1000 grams |
| 2. 2000 pounds | • | • 1 ton |
| 3. 1 kilogram | • | • 2.2 pounds |
| 4. 1 kilogram | • | • 16 ounces |

Name: _____

Math Unit 14

Match each item on the left with the correct item on the right.

- | | | |
|--------------------|---|--------------------|
| 1. 1 inch | • | • 1 kilometer |
| 2. 100 centimeters | • | • 2.54 centimeters |
| 3. 1000 meters | • | • 1 meter |

Name: _____

Math Unit 15

Match each item on the left with the correct item on the right.

- | | |
|----------------------------|-----------------------|
| 1. 1 tablespoon (tbsp) • | • 30 milliliters (ml) |
| 2. 1 ounce (oz.) • | • 1 liter (l) |
| 3. 1 teaspoon (tsp) • | • 15 milliliters (ml) |
| 4. 1 tablespoon (tbsp) • | • 2 tablespoon (tbsp) |
| 5. 1 ounce (oz) • | • 5 milliliters (ml) |
| 6. 1000 milliliters (ml) • | • 3 teaspoons (tsp) |

Name: _____

Math Unit 16-18

Match each item on the left with the correct item on the right.

- | | |
|--|--|
| 1. The perimeter of a polygon • | • $\frac{1}{2}$ its base times its height |
| 2. The area of a rectangle • | • Right triangle, isosceles triangle, equilateral triangle |
| 3. The area of a square • | • one of its sides squared |
| 4. The volume of a rectangular solid • | • 2 times Pi times its radius |
| 5. The area of a triangle • | • Pi times its radius squared |
| 6. Three types of triangles • | • 3.14 |
| 7. Pi • | • The sum of the length of its sides |
| 8. The circumference of a circle • | • its length time its width times its height |
| 9. The area of a circle • | • Its base times its height |