

GEOGRAPHY

Suggested use:

This is not required work for Colm Cille Club and is only provided as a helpful tool to aid in learning the Geography memory work for the year. Each packet includes a Master Map for a selected group of units, a Practice Map for every unit, and review quizzes for home use. You may print a packet for each child or print one packet and put the pages in sheet protectors. Children can then use wet erase markers to complete the practice assignments and erase them for use by the next child.

Year 2 includes:

Unit 1: The Continents and the Oceans

Level 1 - Continents and Oceans only

Level 2 - optional - this isn't part of the Memory Work but rather a chance to introduce or review the concepts of latitude, longitude and the hemispheres if your child is ready.

Units 2-9: The countries of Europe

Practice map for each unit (A little extra practice for Unit 2)

A review quiz after every 3 units

Units 10-12: Some European capital cities, rivers and bodies of water

Practice map for each unit

A review quiz for all 3 units

Units 13-14: Eastern Europe-Western Asia

Practice map for each unit

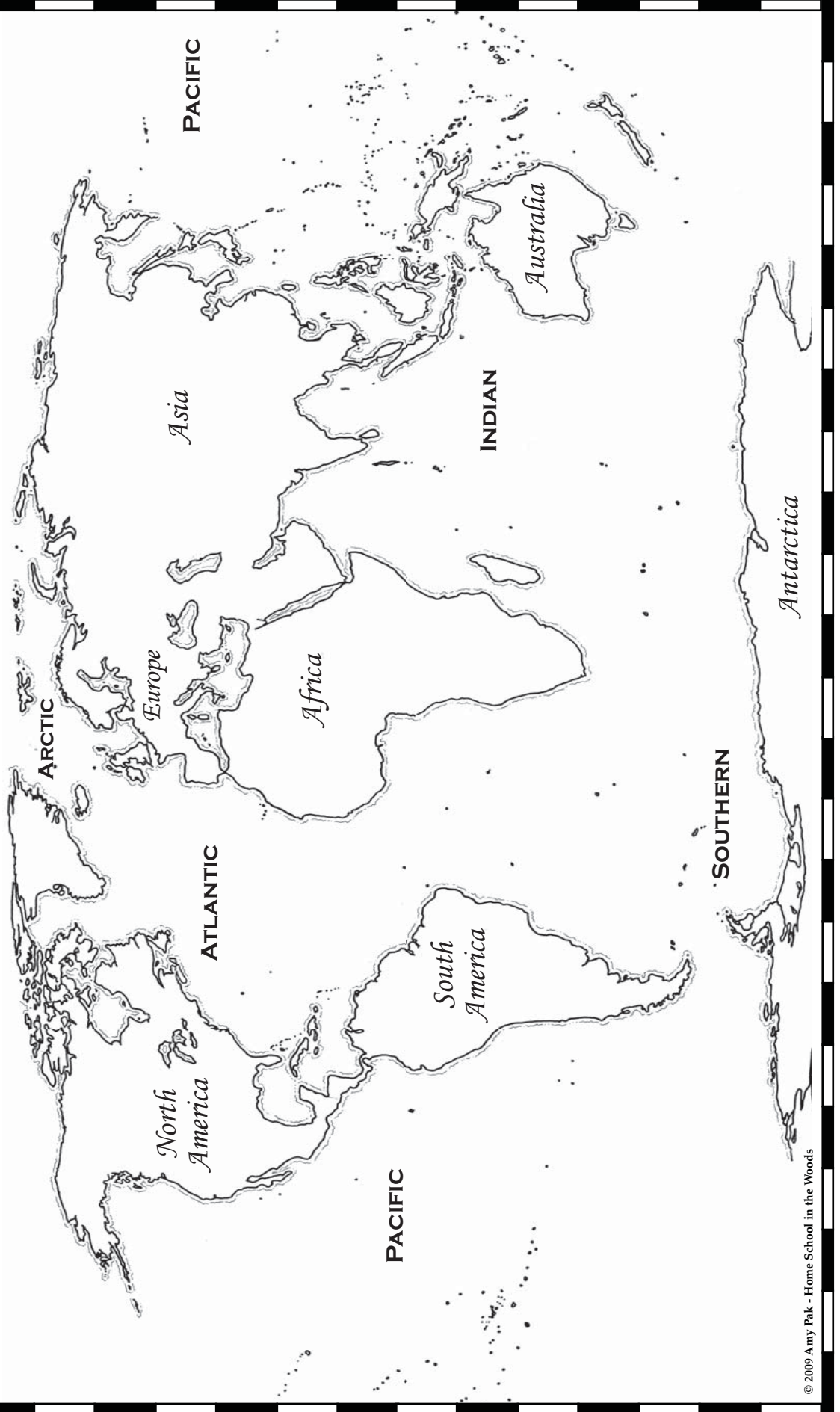
A review quiz for the 2 units

Units 15-18: South America

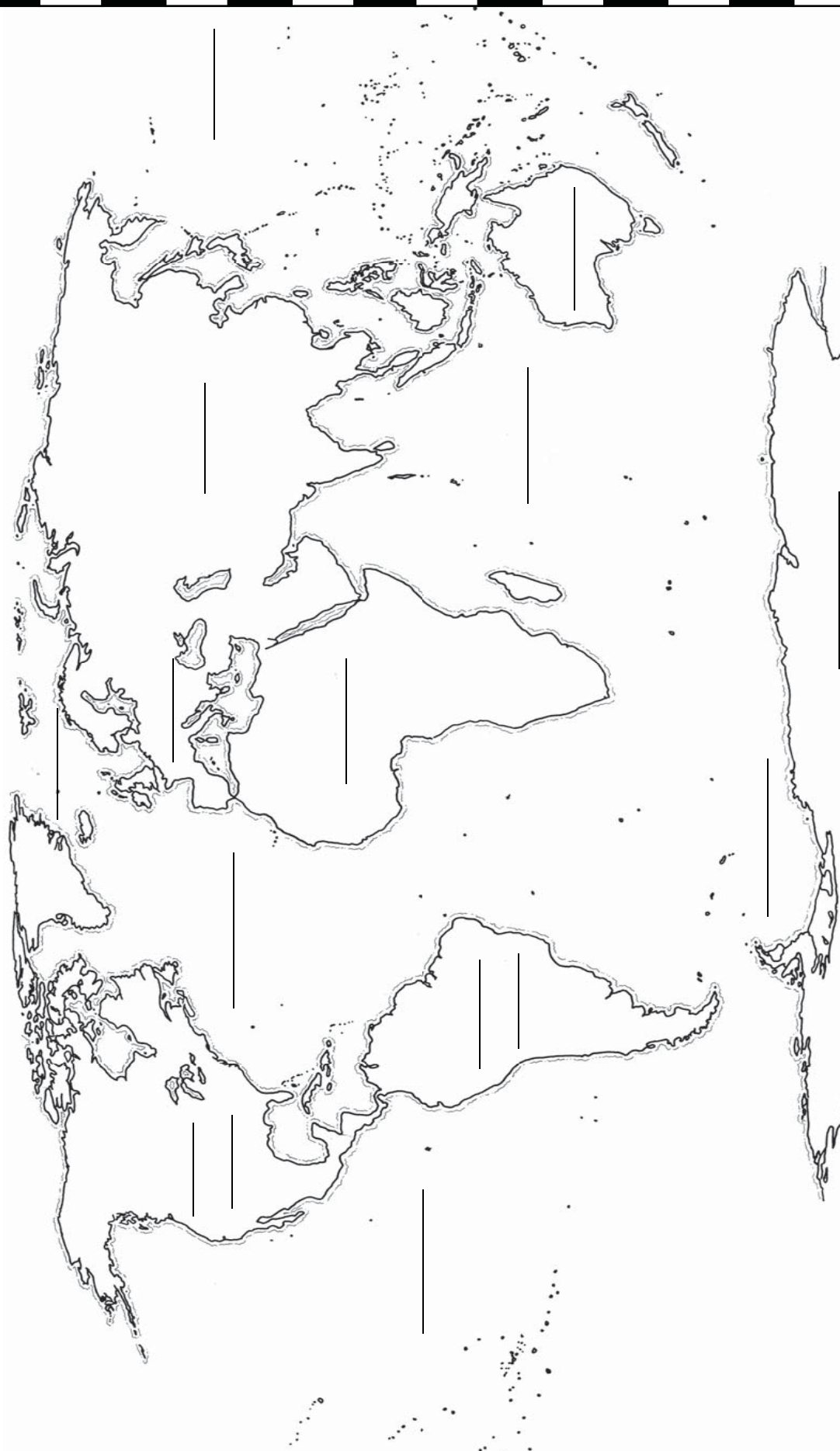
Practice map for each unit

A review quiz for all 4 units

THE WORLD CONTINENTS & OCEANS



THE WORLD CONTINENTS & OCEANS



GEOGRAPHY

Describe these terms:

Lines of Latitude:

Lines of Latitude are lines that run east and west. They are often called "parallels." The 0° line is the equator. The lines measure distance north and south of the equator.

Lines of Longitude:

Lines of Longitude are lines that run north and south. Referred to as "meridians," the "Prime Meridian" runs through Greenwich, England. They measure distance east and west of the prime meridian.

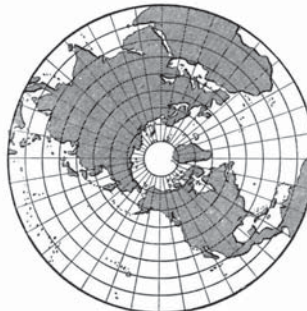
WESTERN
HEMISPHERE



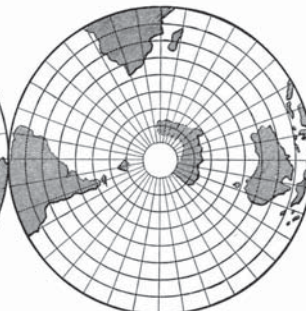
EASTERN
HEMISPHERE



NORTHERN
HEMISPHERE



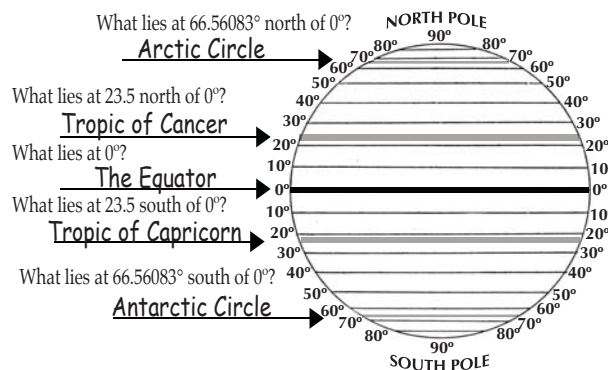
SOUTHERN
HEMISPHERE



Name the Continents & Oceans:

- | | |
|--------------------------|--------------------------|
| 1. <u>Pacific Ocean</u> | 8. <u>Africa</u> |
| 2. <u>North America</u> | 9. <u>Antarctica</u> |
| 3. <u>South America</u> | 10. <u>Asia</u> |
| 4. <u>Atlantic Ocean</u> | 11. <u>Indian Ocean</u> |
| 5. <u>Southern Ocean</u> | 12. <u>Australia</u> |
| 6. <u>Arctic Ocean</u> | 13. <u>Pacific Ocean</u> |
| 7. <u>Europe</u> | (connects to #1) |

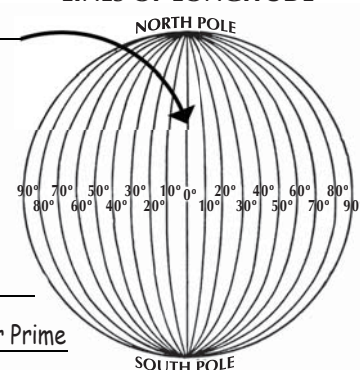
LINES OF LATITUDE



LINES OF LONGITUDE

What lies at 0° longitude?

Prime Meridian



Hemisphere:

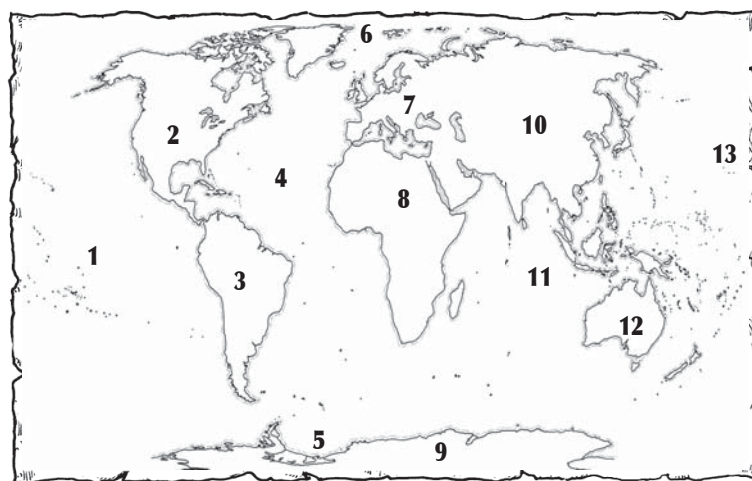
The earth is a round sphere. If it were cut in half along its equator or Prime Meridian, each half would be a "hemi" sphere.

The Western Hemisphere contains these countries & oceans: North America, South America, Pacific Ocean, Atlantic Ocean

The Eastern Hemisphere contains these countries & oceans: Europe, Asia, Africa, Indian Ocean, Pacific Ocean, Australia

The Northern Hemisphere contains these countries & oceans: Asia, Indian Ocean, Africa, Europe, North America, Pacific Ocean

The Southern Hemisphere contains these countries & oceans: South America, Atlantic Ocean, Africa, Indian Ocean, Australia, Pacific Ocean, Antarctica



GEOGRAPHY

Describe these terms:

Lines of Latitude:

Lines of Longitude:

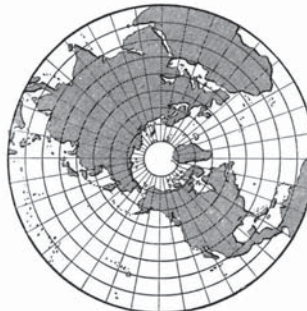
WESTERN
HEMISPHERE



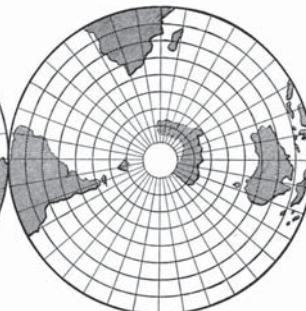
EASTERN
HEMISPHERE



NORTHERN
HEMISPHERE



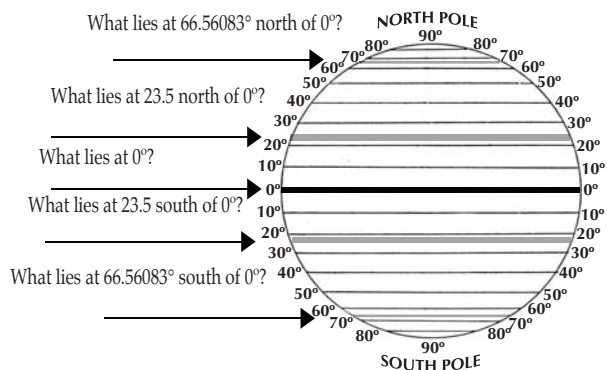
SOUTHERN
HEMISPHERE



Name the Continents & Oceans:

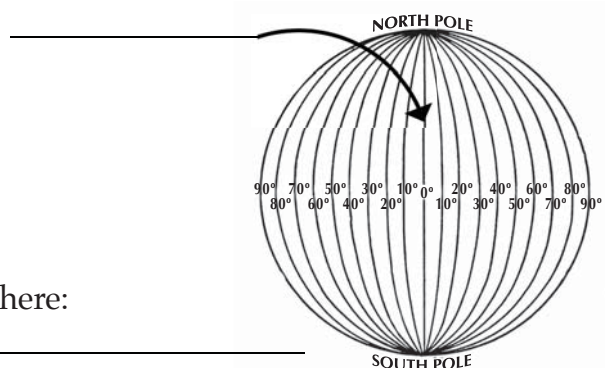
1. _____ 8. _____
2. _____ 9. _____
3. _____ 10. _____
4. _____ 11. _____
5. _____ 12. _____
6. _____ 13. _____
7. _____

Lines of Latitude



What lies at 0° longitude?

Lines of Longitude



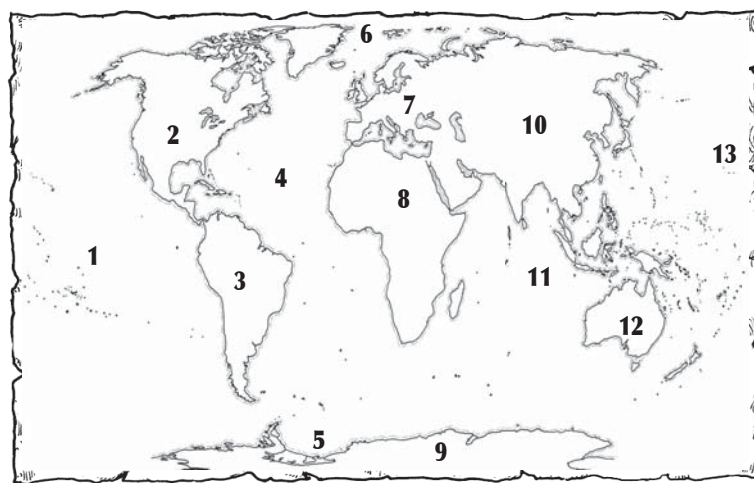
Hemisphere:

The Western Hemisphere contains:

The Eastern Hemisphere contains:

The Northern Hemisphere contains:

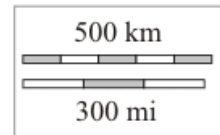
The Southern Hemisphere contains:











© d-maps.com

Directions:

1. Color England red.
2. Color Wales purple.
3. Color Scotland orange.
4. Draw a circle around the island of Great Britain.
5. Color Northern Ireland yellow.
6. Choose a way to show that the island of Great Britain plus Northern Ireland comprise the United Kingdom.
7. Color Ireland green.
8. Draw a dark blue line to show the location of the English Channel.

Name: _____

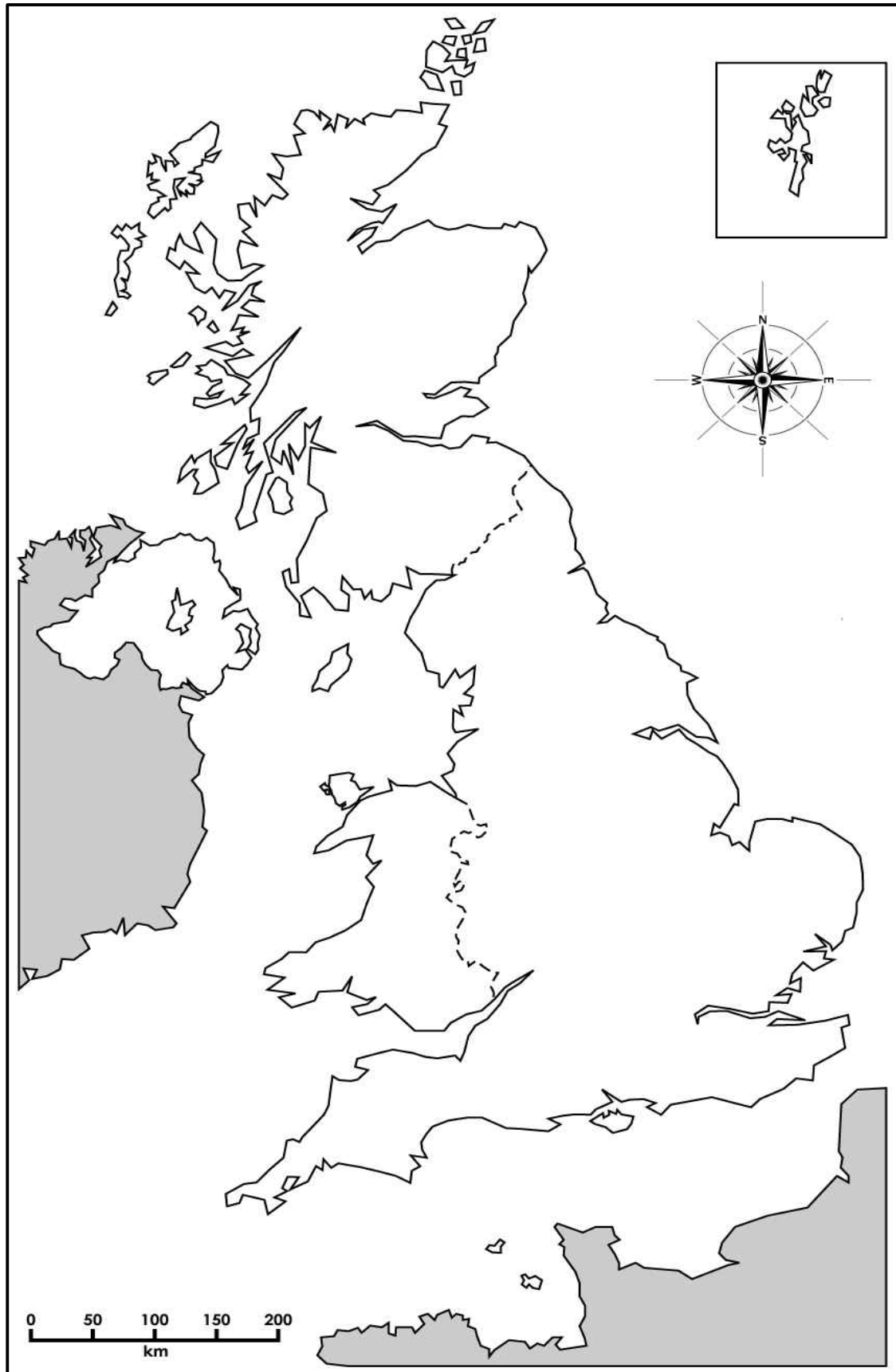
United Kingdom Map Activity

To complete your map of the United Kingdom, follow the directions below. Be sure you write and color neatly.



1. Write your name and date at the top of your map paper.
2. Label the following countries: England
Wales
Scotland
Northern Ireland
3. Label these bodies of water: Celtic Sea
North Sea
Irish Sea
English Channel
Atlantic Ocean
4. Label the following nations: France
Ireland
5. Colour all of the water on the map light blue.
Be sure you colour lightly so your words can still be seen.
6. Colour the countries as follows: England - Green
Ireland - Orange
Scotland - Red
Wales - Purple

United Kingdom of Great Britain and Northern Ireland





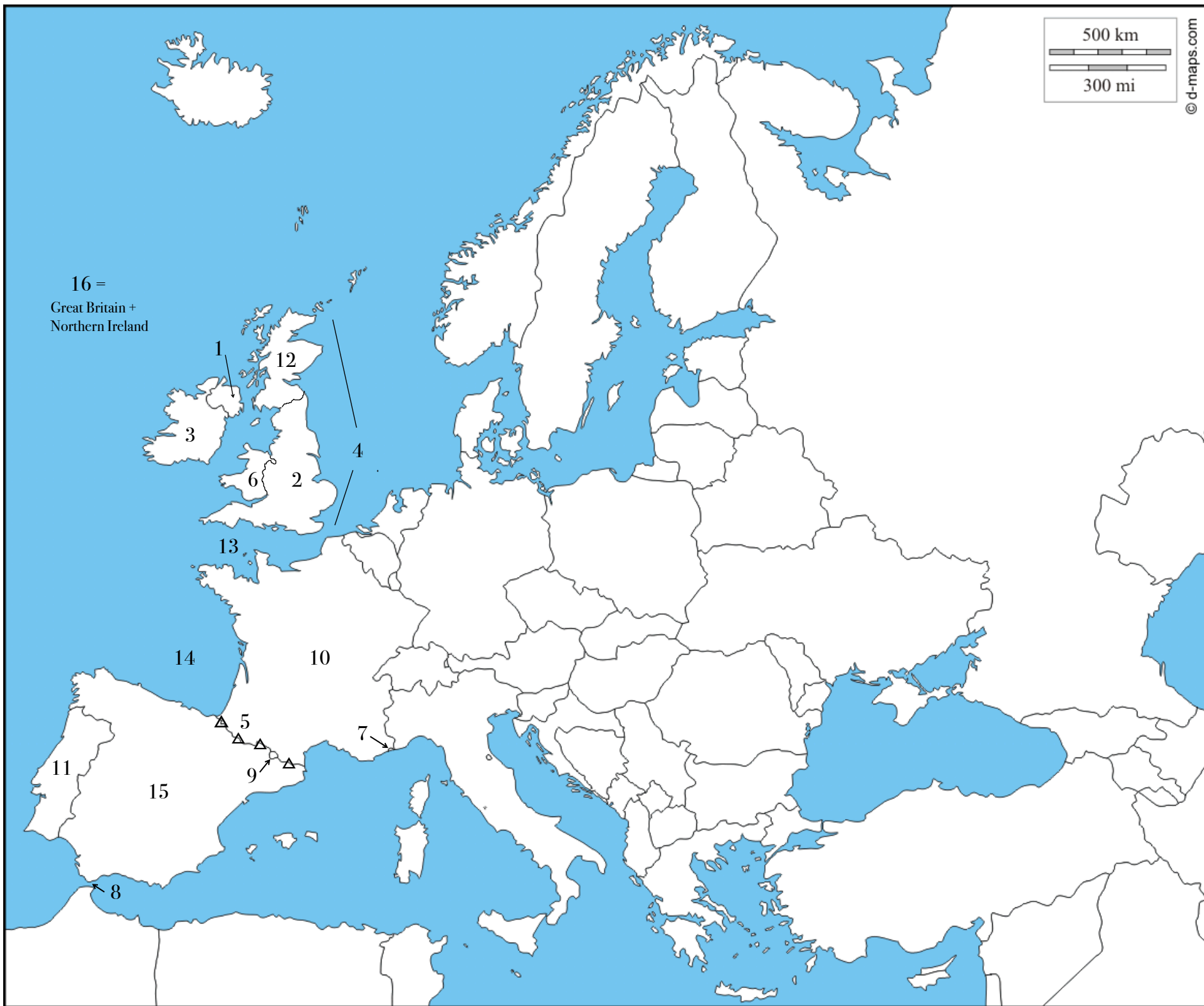
500 km

300 mi

© d-maps.com

Directions:

1. Color Portugal red.
2. Color Spain purple.
3. Color Andorra orange.
4. Color France yellow.
5. Draw a green square around location of Monaco.
6. Draw a line of triangles to show the location of the Pyrenees Mountains.
7. Label the Bay of Biscay.
8. Draw a dark blue line to show the location of the Strait of Gibraltar.



Review Quiz
Units 2 and 3

Name: _____

Directions: Using the map labelled, "Units 2-3 Review Quiz," write the numbers on the lines that correspond with each location.

England _____

Spain _____

Bay of Biscay _____

Scotland _____

Ireland _____

France _____

Pyrenees Mountains _____

United Kingdom _____

Wales _____

Monaco _____

Andorra _____

Portugal _____

English Channel _____

Strait of Gibraltar _____

Northern Ireland _____

Great Britain _____

Answer Key

Review Quiz Units 2 and 3

Name: _____

Directions: Using the map labelled, "Units 2-3 Review Quiz," write the numbers on the lines that correspond with each location.

England ____2____

Spain ____15____

Bay of Biscay ____14____

Scotland ____12____

Ireland ____3____

France ____10____

Pyrenees Mountains ____5____

United Kingdom ____16____

Wales ____6____

Monaco ____7____

Andorra ____9____

Portugal ____11____

English Channel ____13____

Strait of Gibraltar ____8____

Northern Ireland ____1____

Great Britain ____4____







500 km

300 mi

© d-maps.com

Directions:

1. Color Italy red.
2. Color the island of Sicily purple.
3. Color Greece orange.
4. Color the island of Crete yellow.
5. Color Malta brown.
6. Draw a green square around location of San Marino.
7. Draw a line of triangles to show the location of the Apennines.



Directions:

1. Color Slovenia red.
2. Color Croatia purple.
3. Color Bosnia and Herzegovina orange.
4. Color Serbia yellow.
5. Color Montenegro brown.
6. Color Albania green.
7. Color Macedonia pink.



Review Quiz
Units 4-6

Name: _____

Directions: Using the map labelled, "Units 4-6 Review Quiz," write the numbers on the lines that correspond with each location.

Italy _____	Germany _____
Netherlands _____	Albania _____
Macedonia _____	Greece _____
Croatia _____	Belgium _____
Liechtenstein _____	The Alps _____
Slovenia _____	Sicily _____
Switzerland _____	Montenegro _____
Apennines _____	Bosnia & Herzegovina _____
San Marino _____	Crete _____
Luxembourg _____	Malta _____
	Serbia _____

Answer Key

Review Quiz

Units 4-6

Name: _____

Directions: Using the map labelled, "Units 4-6 Review Quiz," write the numbers on the lines that correspond with each location.

Italy _18_____

Netherlands __14____

Macedonia __4_____

Croatia __9_____

Liechtenstein ____11____

Slovenia ____10_____

Switzerland __15_____

Apennines __2_____

San Marino __17_____

Luxembourg __8_____

Germany __5_____

Albania __3_____

Greece __19_____

Belgium ____13_____

The Alps ____16_____

Sicily __20_____

Montenegro ____6_____

Bosnia & Herzegovina ____12____

Crete __1_____

Malta __21_____

Serbia __7_____







Directions:

1. Color Poland red.
2. Color Belarus orange.
3. Color Ukraine yellow.
4. Color Slovakia green.
5. Color the Czech Republic purple.
6. Color Austria brown.
7. Color Hungary pink.
8. Draw a line of triangles showing the location of the Carpathian Mountains.





Review Quiz
Units 7-9

Name: _____

Directions: Using the map labelled, "Units 7-9 Review Quiz," write the numbers on the lines that correspond with each location.

Finland _____

Czech Republic _____

Poland _____

Norway _____

Hungary _____

Lithuania _____

Romania _____

Slovakia _____

Belarus _____

Moldova _____

Latvia _____

Austria _____

Sweden _____

Bulgaria _____

Denmark _____

Turkey _____

Estonia _____

Carpathian Mountains _____

Ukraine _____

Bosphorus _____

Iceland _____

Cyprus _____

Dardanelles _____

Answer Key

Review Quiz

Units 7-9

Name: _____

Directions: Using the map labelled, "Units 7-9 Review Quiz," write the numbers on the lines that correspond with each location.

Finland __8__

Czech Republic __10__

Poland __3__

Norway __11__

Hungary __22__

Lithuania __7__

Romania __4__

Slovakia __13__

Belarus __9__

Moldova __16__

Latvia __2__

Austria __20__

Sweden __1__

Bulgaria __21__

Denmark __15__

Turkey __5__

Estonia __18__

Carpathian Mountains __14__

Ukraine __6__

Bosphorus __17__

Iceland __12__

Cyprus __23__

Dardanelles __19__